

Discovering Money

Draw the Australian Notes in the correct boxes provided. The first one has been completed for you.



\$5 Note



\$10 Note



\$20 Note




\$50 Note




\$100 Note

Each Australian Coin has a different size and shape. Draw the correct coin in the spaces below.


Hint: Place your coins underneath this worksheet and using a pencil shade them in the correct spaces.



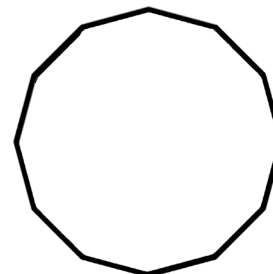
5c Coin




10c Coin




20c Coin



50c Coin



\$1 Coin



\$2 Coin